
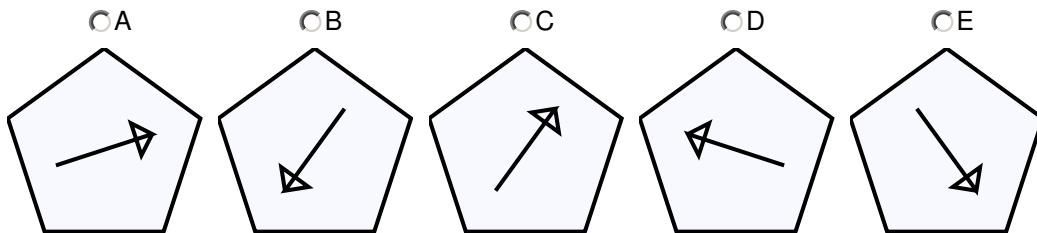


OLSAT Sample Questions


[1] One of these items does not belong with the others. Find the item that is not like the others.



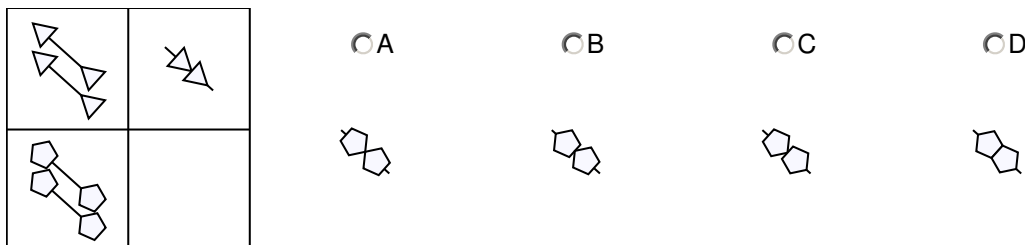
[2] One of these items does not belong with the others. Find the item that is not like the others.



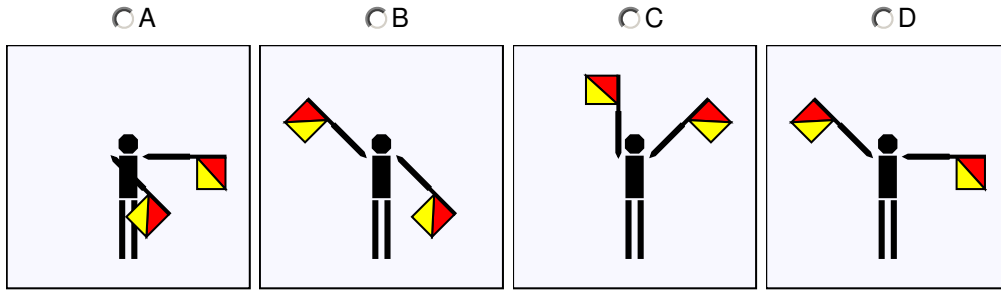
[3] Look at the first figure with four boxes. The pictures in the top two boxes go together in a certain way. What do you think belongs in the empty box so that the pictures in the bottom two boxes go together the same way? Please mark the picture that belongs in the empty space.




[4] Look at the first figure with four boxes. The pictures in the top two boxes go together in a certain way. What do you think belongs in the empty box so that the pictures in the bottom two boxes go together the same way? Please mark the picture that belongs in the empty space.



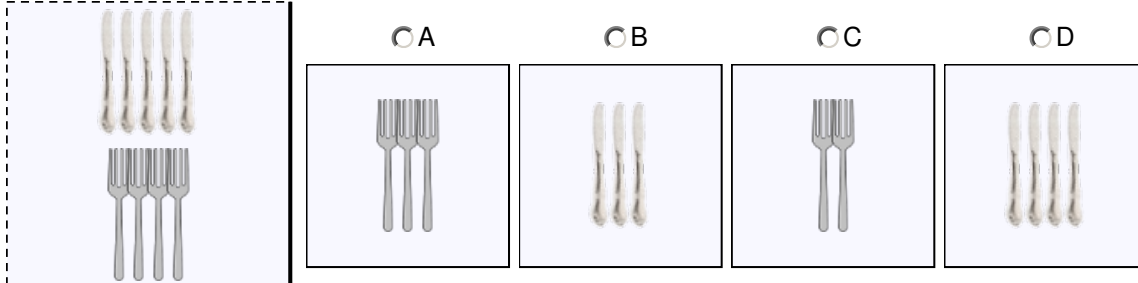
[5] In the Semaphore flag signalling system, annul sign is expressed with left hand low and right hand high. Mark under the picture that shows the annul sign.



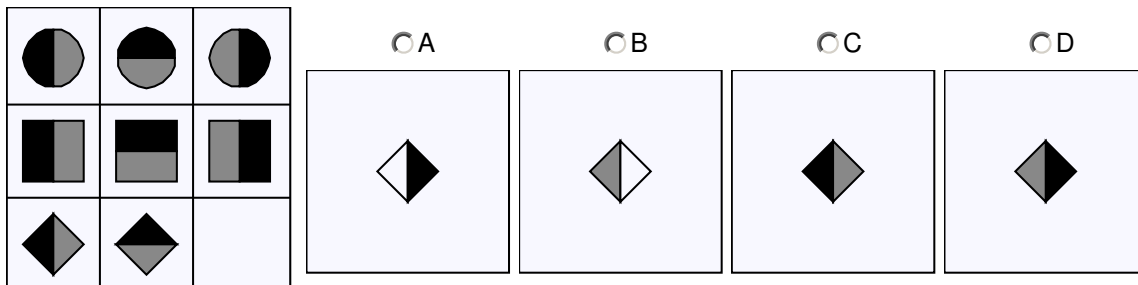
[6] Each picture shows a male character and a female character. Mark the picture that shows that the male's left hand is holding the female's right hand.



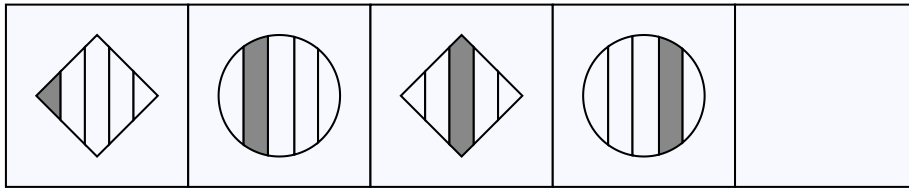
[7] The picture at the beginning of the row shows existing knives and forks. Which of the following when added to the existing will make sure there are half as many of forks as knives.



[8] Look at the boxes at the beginning of the row with pictures inside them. Something belongs in the empty box. Mark the picture that belongs in the empty box.



[9] The pictures in the boxes go together in a certain way. Something belongs in the empty box. Mark the picture that belongs in the empty box.



A



B



C



D

